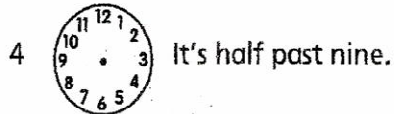
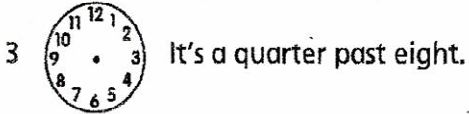
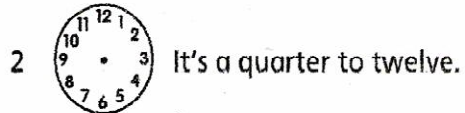


Telling the time

What time is it?

It's
four o'clock.
half past four.
a quarter to five.

1 Read and draw the times.





2 Look and write the times.



1 It's half past two.

2 _____

3 _____



4 _____

5 _____

6 _____

3 Write the questions and answers.

